

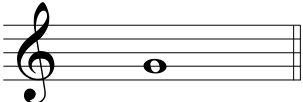
Intervalos Cromáticos VI

(Intervalos Maiores, Menores, Justos, Diminutos e Aumentados)


Escreva a nota acima da nota dada que completa o intervalo.

Exemplo 


3+

1 


5°

2 

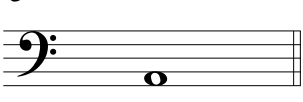
7m

3 


7+

4 


6+

5 


4°

6 


4J

7 


6M

8 


3m

9 


3+

10 


6m

11 


8+

12 


4J

13 

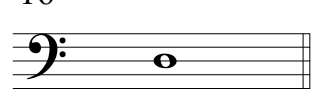
7m

14 


8°

15 

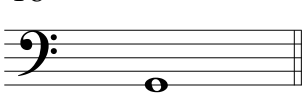
3m

16 


6M

17 


5J

18 


2+

19 


2°

20 


7M

21 


5+

22 

7m

23 

4+

24 

3°