


























# Intervalos Cromáticos V

(Intervalos Maiores, Menores, Justos, Diminutos e Aumentados)

Escreva a nota acima da nota dada que completa o intervalo.

Exemplo 

1  3+	2  3M	3  6m	4  7°
5  5+	6  7m	7  3M	8  7°
9  5°	10  6M	11  5+	12  4°
13  7M	14  5+	15  6m	16  4J
17  7m	18  8°	19  3°	20  6+
21  2+	22  6°	23  7M	24  6M