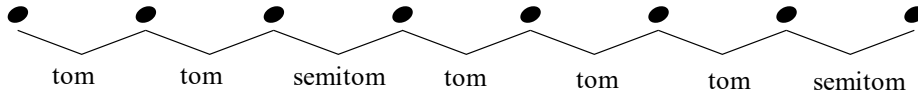


Nome _____

Data _____


Escala Maior IIIb -

Use este padrão de escala maior para ajudar a completar os exercícios:




Escreva a escala maior para a armadura dada. —


1 Nome da Escala: _____




2 Nome da Escala: _____




3 Nome da Escala: _____



4 Nome da Escala: _____



5 Nome da Escala: _____



6 Nome da Escala: _____

