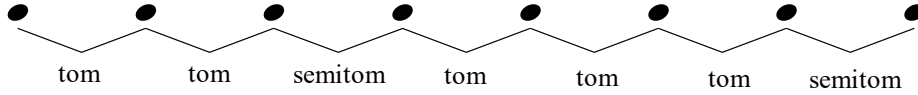


# Escala Maior IIIa -

Use este padrão de escala maior para ajudar a completar os exercícios:




Escreva a escala maior para a armadura dada.


*Exemplo* Fá Maior




1 Nome da Escala: \_\_\_\_\_




2 Nome da Escala: \_\_\_\_\_




3 Nome da Escala: \_\_\_\_\_



4 Nome da Escala: \_\_\_\_\_



5 Nome da Escala: \_\_\_\_\_



6 Nome da Escala: \_\_\_\_\_

